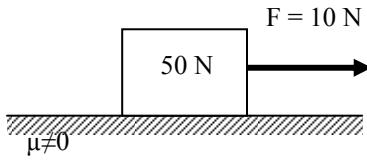


**W3.11****DYNAMICS  $\Sigma F \neq 0$** 

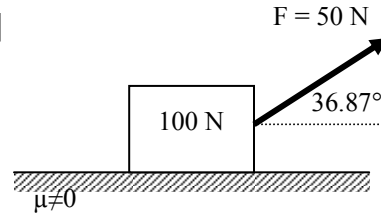
Find the acceleration of each box.

[Note:  $\mu_{\text{static}}=0.2$  &  $\mu_{\text{sliding}}=0.2$  for all surfaces]

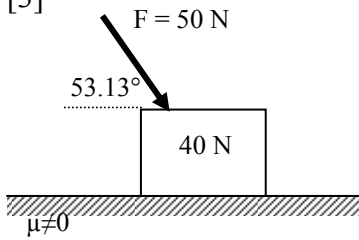
[1]



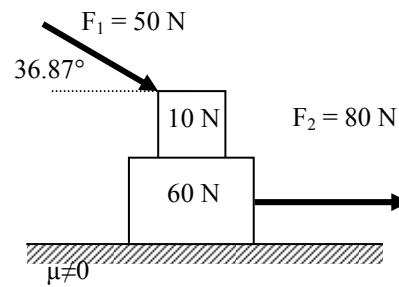
[2]



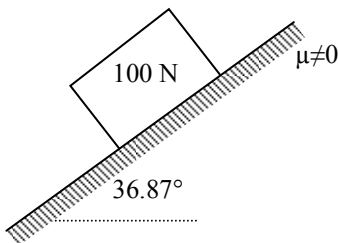
[3]



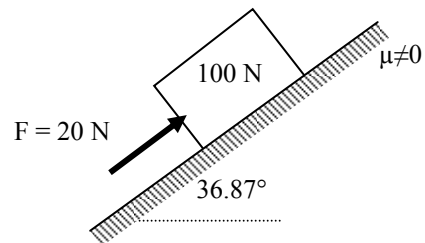
[4]



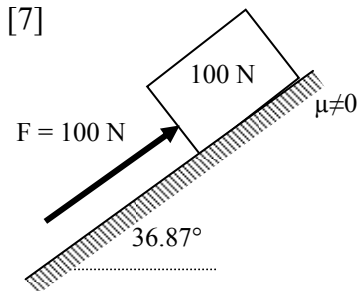
[5]



[6]



[7]



[8]

