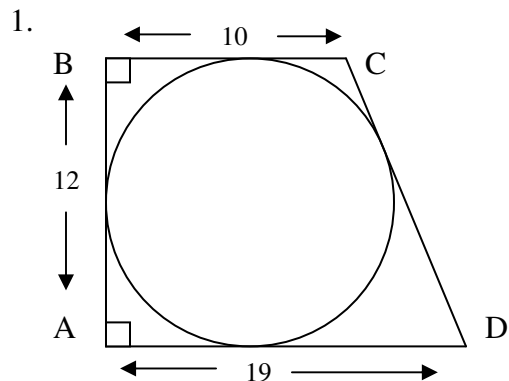


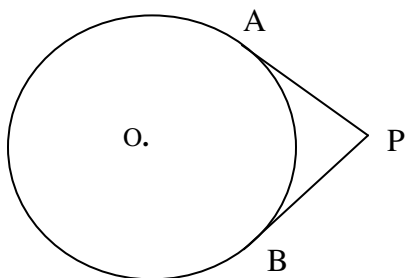
Ch 9.1-9.4
Review

Name

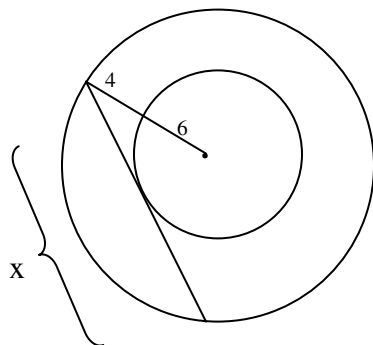


CD = _____

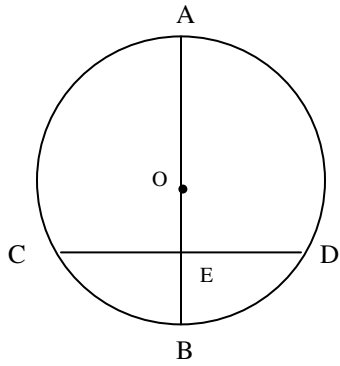
2. PA and PB are tangents. PA = 9 Radius of circle O = 12. Find the distance from P to the center.



3. Concentric circles with the smaller radius = 6 and the distance between them = 4. Find x.



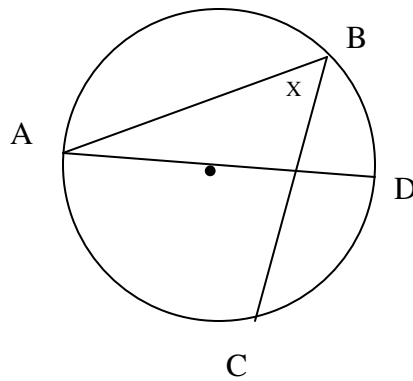
5.



$AO = 13$
 $EB = 8$
Find CE

CE = _____

6. $\angle BAD = 20^\circ$ $\overline{AB} \cong \overline{BC}$
Find the measure of $\angle x$



Answers

1. CD=15
2. 15
3. 16
5. 12
6. 40